

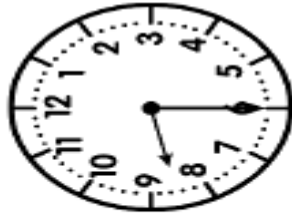
# exercices 1<sup>MC</sup> MESURES

## 1<sup>FICHE</sup> FICHE n°04

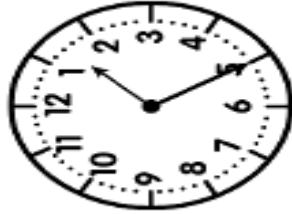
① Écris l'heure de la nuit/du matin sous chaque horloge.



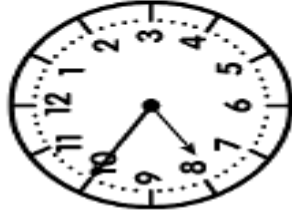
h



h



h



h



h



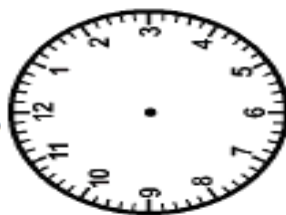
h



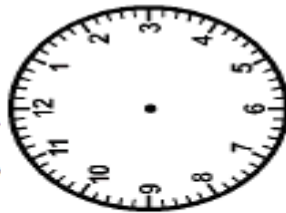
h



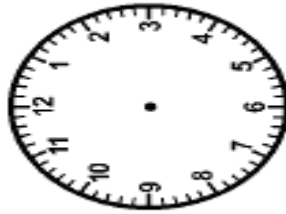
② Trace les aiguilles (rouge pour les heures, bleue pour les minutes).



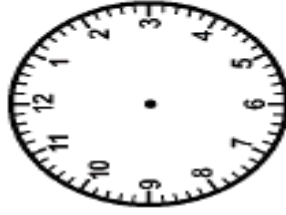
6 h 30



15 h 15



9 h 50



21 h 05



12 h 00



17 h 40



23 h 25



③ Complète ces égalités.

a)  $7h45min + \underline{\hspace{1cm}} = 8h$   
 b)  $3h20min + \underline{\hspace{1cm}} = 4h$

c)  $10h55min + \underline{\hspace{1cm}} = 11h$   
 d)  $16h30min + \underline{\hspace{1cm}} = 17h$   
 e)  $23h15min + \underline{\hspace{1cm}} = 0h$

f)  $12h10min + \underline{\hspace{1cm}} = 13h$   
 g)  $21h50min + \underline{\hspace{1cm}} = 22h$   
 h)  $9h40min + \underline{\hspace{1cm}} = 10h$