


exercices 1^{CM} MESURES

2^M FICHE n°04

1


Dans combien de temps sera-t-il... ?



une heure ?

60 min — 15 min =


45 min



trois heures ?

60 min — 35 min =


25 min



cinq heures ?

60 min — 45 min =

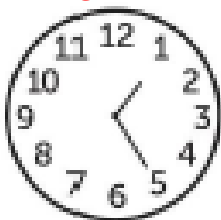
15 min



midi ?

60 min — 30 min =


30 min



2 heures ?

60 min — 25 min =


35 min



10 heures ?

60 min — 10 min =

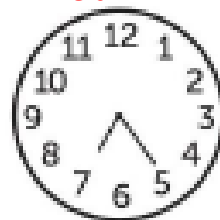
50 min



8 heures ?

60 min — 10 min =

10 min



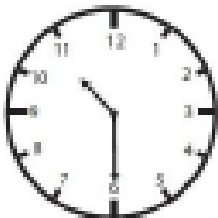
8 heures ?

60 min — 25 min =

35 min


2

Combien de minutes depuis... ?



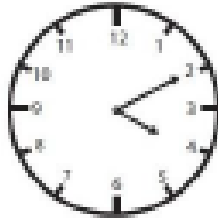
10 heures ?

30 min




13 heures ?

50 min




16 heures ?

10 min




minuit ?

40 min




onze heures ?

15 min



sept heures ?

15 min



quatre heures ?

45 min