


exercices 1^{CM} MESURES


2^M FICHE n°04

1


Dans combien de temps sera-t-il... ?




une heure ?




trois heures ?




cinq heures ?




midi ?




2 heures ?



10 heures ?



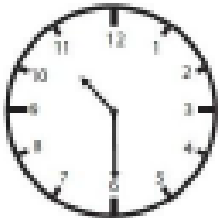
8 heures ?




8 heures ?

2

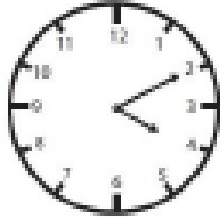
Combien de minutes depuis... ?



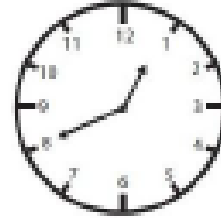
10 heures ?




13 heures ?




16 heures ?




minuit ?



onze heures ?



sept heures ?



quatre heures ?